
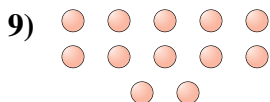
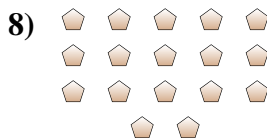
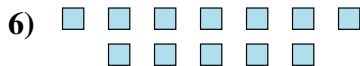
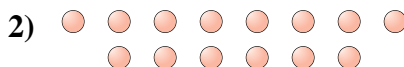




Determine if the number of shapes is even or odd.



Answers

1. \_\_\_\_\_

2. \_\_\_\_\_

3. \_\_\_\_\_

4. \_\_\_\_\_

5. \_\_\_\_\_

6. \_\_\_\_\_

7. \_\_\_\_\_

8. \_\_\_\_\_

9. \_\_\_\_\_

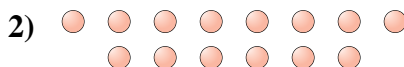
10. \_\_\_\_\_



Determine if the number of shapes is even or odd.



15



14



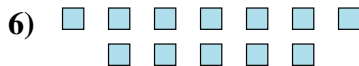
10



9



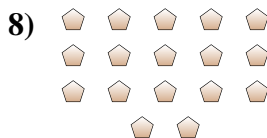
6



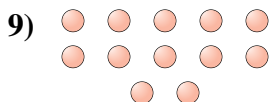
12




13



17



12



17

Answers

1. odd

2. even

3. even

4. odd

5. even

6. even

7. odd

8. odd

9. even

10. odd